

# Graad 3: Week 1 & 2



Afrikaans

## Families en Gemeenskappe



Ministry of Education,  
Arts and Culture

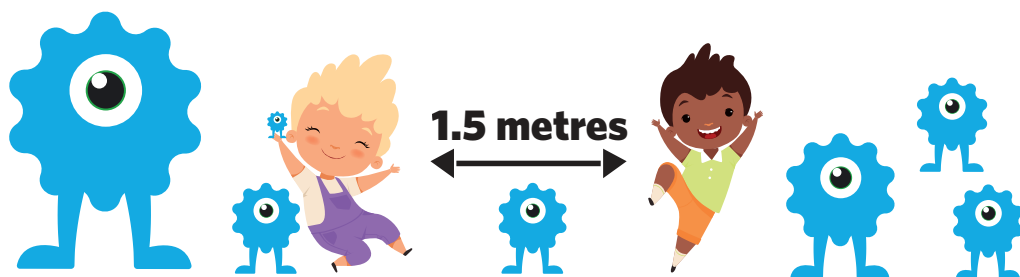


**NAMIBIAN**  
COMMUNITY TRUST



for every child





These numbers indicate which day you can complete each worksheet! But if you want to, you can work ahead and do the rest as well.

**This publication is a collaboration between the Ministry of Education, Arts and Culture and Namibia Media Holdings. This publication is sponsored by the Ministry.**

**Copyright © Ministry of Education, Arts and Culture.** All parts of this publication cannot be reproduced, stored in a retrieval system or transmitted in any form or by any means, electronic, mechanical, photocopying, recording or otherwise without prior permission of the Ministry of Education, Arts and Culture or the Publisher.

**Production by: Namibia Media Holdings**  NAMIBIA MEDIA HOLDINGS

**Printing: Newsprint Namibia** 




## My Familie

## Woordeskat en sigwoorde

Lees die onderstaande woorde:

## Woordeskat:



familie  
ouers  
suster  
broer  
lede



## Sigwoorde:

ons  
was  
in  
en  
die  
is  
vyf  
gaam



# My Familie

## Graad 3 leesles

Ons is 'n gesin en ons is lief vir ons huis. Daar is sewe lede in ons gesin. Daar is my ouers, my suster, my broer en ek. Die oggend gaan my pa na sy kantoor. My broer, ek en my suster gaan skool toe. Sam en Anna is ook my broer en suster omdat ons ouers hulle verlede jaar aangeneem het toe hulle ouers sterf. Ma is 'n huisvrou. Sy bly tuis om die huis op te ruim en die kos te kook. Die hele gesin help vir ma. Ek was die skottelgoed en maak my eie bed op. Betty help ma om die tafel te dek en om die klere te was. Tom sê 'n seun moet buite werk. Hy help graag vir pa in die tuin, maar ek dink hy hou daarvan om met die hond te speel. Ek wil ook in die tuin werk. Dit is harde werk om die skottelgoed vir die gesin te was. Saans bly ons tuis. Pa lees die koerant. Ma help ons met ons huiswerk en dan kyk ons televisie.

Week 1

Graad 3

### Beantwoord die vrae nadat jy die storie gelees het:

1. Hoeveel familieledede is in die gesin?

2. Gaan ma werk toe?

3. Waar werk pa?

4. Is dit harde werk om skottelgoed vir 'n hele gesin te was?

5. Wat doen pa in die aand?

6. Skryf die name van die aangeneemde broers en susters.



# Teken 'n prent van jou en jou familie.

Week 1

Graad 3

Voltooi die sinne.

My naam is \_\_\_\_\_ .

Ek is \_\_\_\_\_ jaar oud.

My verjaarsdag is op die \_\_\_\_\_ .

My haarkleur is \_\_\_\_\_ en my oëkleur is \_\_\_\_\_ .

Ek is 'n lid van die \_\_\_\_\_ gesin.

Ek hou van baie \_\_\_\_\_ .

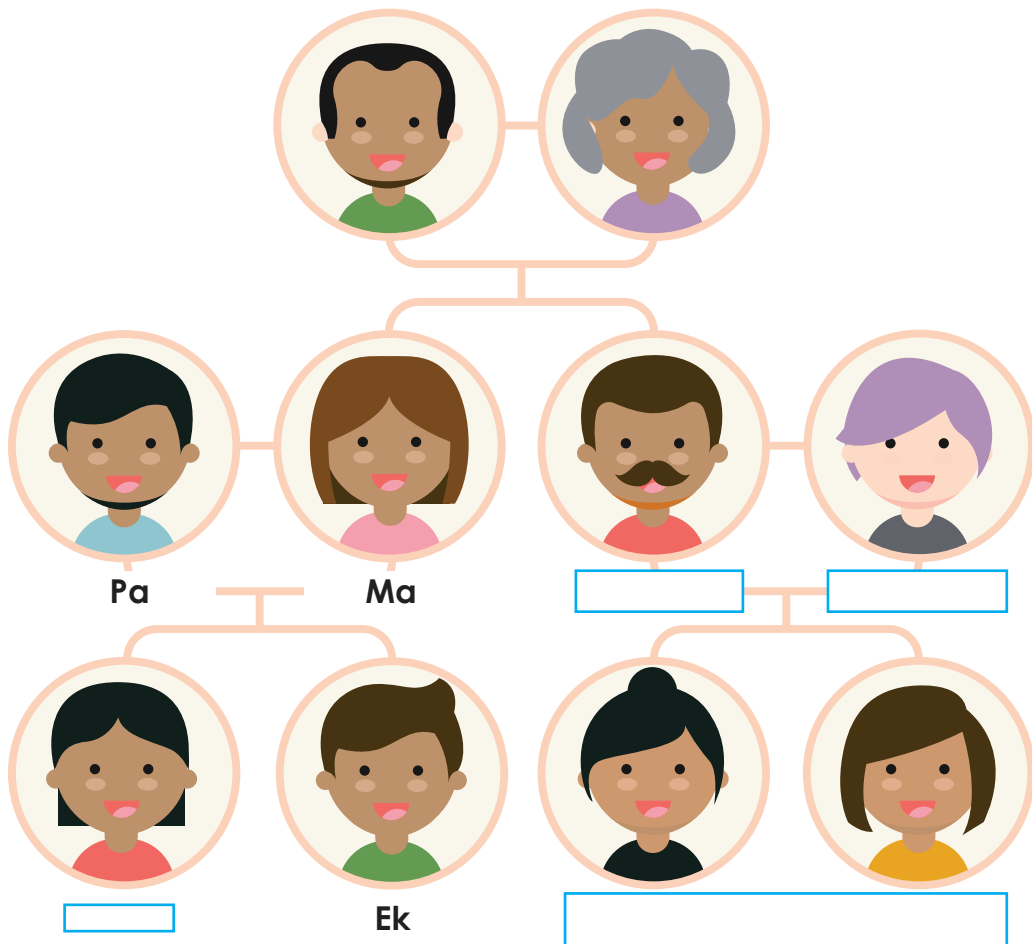


1.5 metres



Gebruik die onderstaande woordboks om die name van die ontbrekende familieledede in te vul.

Oupa



### Woordboks:

1. niggie en neef
2. suster
3. ouma
4. tannie
5. oom

# Selfstandige naamwoorde

2

7

Knip en plak name van die regte naamwoord en plak in die spasie wat daarvoor voorsien word.



Mense

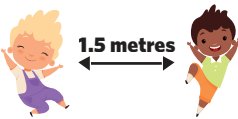
Plekke

Dinge

Week 1

Gradd 3

ouma	huis	kat	meisie
skool	potlood	winkel	seun
boom	gogga	dorp	ma
onderwyser	klip	park	







## Leestekens

2

Ek vertel

.

Ek skree

!

Ek vra

?

Gebruik  
dit as 'n  
voorbeeld.

Skryf die regte leestekens in:



1. Het jy 'n hoed

2. Gee dit terug

3. Die pen is rooi

4. Kan jy sokker speel

5. Stop dit



161	162	163	164	165	166	167	168	169	170
171	172	173	174	175	176	177	178	179	180
181	182	183	184	185	186	187	188	189	190
191	192	193	194	195	196	197	198	199	200

1. Kleur die blokkies met die volgende getalle in.

**168.      174.      199.**

2. Skryf die nommer wat voor 190 kom.

\_\_\_\_\_

3. Skryf die nommer wat na 179 kom.

\_\_\_\_\_

4. 185 kom na \_\_\_\_\_

5. 182 kom voor \_\_\_\_\_

6. Skryf die getalname

(a) 11 = \_\_\_\_\_ (b) 7 = \_\_\_\_\_

(c) 19 = \_\_\_\_\_

(d) 13 = \_\_\_\_\_

\_\_\_\_\_

\_\_\_\_\_



2



10 empty square boxes arranged vertically, corresponding to the rungs of the blue ladder.

Tel in twee's.

3



10 empty square boxes arranged vertically, corresponding to the rungs of the black ladder.

Tel in drie's.


A square box containing the number 3.



1.5 metres



4



5



3



Tel in  
vier's.

Tel in  
vywe.



# Gister en Môre

## Voltooi

Gister	Vandag	Môre
	Vrydag	
	Maandag	
	Woensdag	
	Dinsdag	
	Sondag	
	Donderdag	
	Saterdag	



Bereken die dae en beantwoord die vrae wat volg

- 1 week + 3 dae = \_\_\_\_\_ dae
- 15 dae + 1 week = \_\_\_\_\_ dae
- 2 weke + 4 dae = \_\_\_\_\_ dae
- Die eerste dag van die week is \_\_\_\_\_ .
- Donderdag is die dag voor \_\_\_\_\_ .
- Die tweede dag is \_\_\_\_\_ .
- \_\_\_\_\_ is die dag in die middel van die week.



1.5 metres



# Wiskunde Manie!

$$\begin{array}{r} 21 \\ + 34 \\ \hline \end{array}$$

$$\begin{array}{r} 42 \\ + 23 \\ \hline \end{array}$$

$$\begin{array}{r} 45 \\ + 20 \\ \hline \end{array}$$

$$\begin{array}{r} 41 \\ + 23 \\ \hline \end{array}$$

$$\begin{array}{r} 43 \\ + 50 \\ \hline \end{array}$$

$$\begin{array}{r} 46 \\ + 51 \\ \hline \end{array}$$

$$\begin{array}{r} 34 \\ + 13 \\ \hline \end{array}$$

$$\begin{array}{r} 74 \\ + 11 \\ \hline \end{array}$$

$$\begin{array}{r} 50 \\ + 32 \\ \hline \end{array}$$

$$\begin{array}{r} 42 \\ + 14 \\ \hline \end{array}$$

$$\begin{array}{r} 56 \\ + 30 \\ \hline \end{array}$$

$$\begin{array}{r} 72 \\ + 23 \\ \hline \end{array}$$

$$\begin{array}{r} 13 \\ + 10 \\ \hline \end{array}$$

$$\begin{array}{r} 63 \\ + 24 \\ \hline \end{array}$$

$$\begin{array}{r} 60 \\ + 15 \\ \hline \end{array}$$

$$\begin{array}{r} 37 \\ + 21 \\ \hline \end{array}$$

$$\begin{array}{r} 25 \\ + 23 \\ \hline \end{array}$$

$$\begin{array}{r} 41 \\ + 16 \\ \hline \end{array}$$




## Woordsomme

Wys die stappe om die getalsinne op te los

Moet nie vergeet om jou berekeninge te wys nie.

1. Ma koop 8 eiers. Sy het nog 4 eiers nodig om 'n koek te bak. Hoeveel eiers sal sy gebruik?




---



---



---

2. Pa het 7 dasse. Oom Jan het 3 dasse. Hoeveel dasse het hulle altesaam?




---



---



---

3. Daar is 4 broers , 3 susters en 2 neefs. Hoeveel lede is in die familie?

---



---

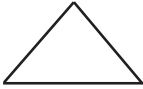



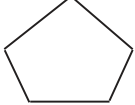
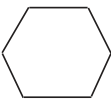

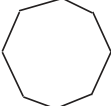



---



# 2D Vorms Eienskappe

## Voltooi

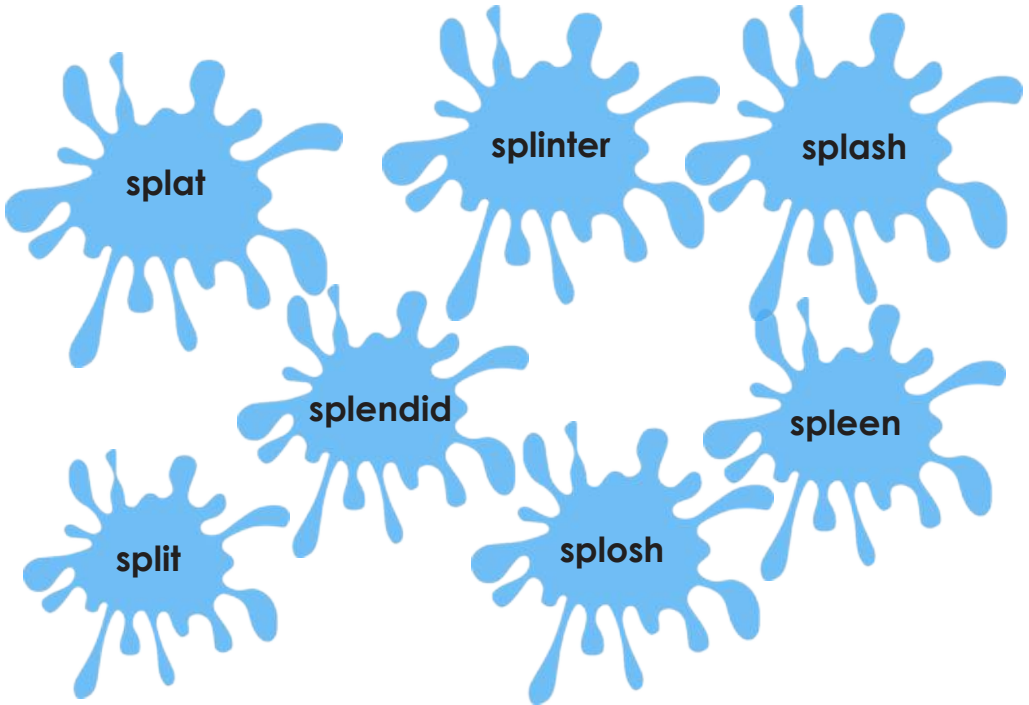
Vorm	Naam	Hoeveel kante?	Hoeveel hoeke?
			
			
			
			
			
			
			
			
			





English activity

1



Choose 3 words from the sketch above and make your own sentences:

1.

---



---

2.

---



---

3.

---



---



## Begrip: My Skool

Lees die storie hieronder en beantwoord die vrae wat volg

Ek het drie jaar gelede begin skoolgaan. Dis 'n wonderlike plek. Daar is 'n groot skoolwerf en ek kan tydens pouse met my klasmaats speel. Daar is ook 'n paar swaai. My onderwyseres se naam is Mevrouw Roper en sy is baie gaaf en raak nooit kwaad nie. Sy praat stadig en het baie geduld. Sy help my as ek nie iets verstaan nie. Hierdie maand leer skryf ek my alfabet en teken getalle in my notaboek. Ek dra 'n groen skooltas en ek sit op die tweede tafel langs die venster. Mevrouw Roper is 'n lang vrou en sy dra 'n bril. Sy lees vir ons kortverhale en ons kan haar enige vrae oor die verhaal vra. Die middag sing ons gereeld kinderliedjies en fluit. Ek hou van allerhande musiek. My ouers kyk na TikToks en luister na Itunes. Ek gaan per motor skool toe. My pa neem my soggens skool toe en my ma kom haal my die middag. Skool eindig om een uur.



1. **Wat is die onderwyser se naam?**

---



---

2. **Waar speel hulle tydens pouse?**

---



---

3. **Hoe weet jy dat mevrou Roper 'n gawe persoon is?**

---



---

4. **Wanneer sing hulle kinderliedjies?**

---




---

5. **Wie kyk na TikToks?**

---




---



Meervoude: Voeg 's' by.  
Voeg 's' by elk van hierdie woorde om dit meervoudig te maak.



Enkelvoud		Meervoud
seun		seuns
meisie		
winkel		
tafel		
wurm		
appel		
leeu		
piesang		
koning		

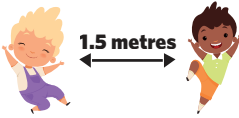



Voeg 's'



Week 2

Graad 3





Gebruik enige van die meervoude van die vorige bladsy om ses sinne te skryf. Onthou om van hoofletters en punte gebruik te maak.

Week 2

Graad 3

1. \_\_\_\_\_
2. \_\_\_\_\_
3. \_\_\_\_\_
4. \_\_\_\_\_
5. \_\_\_\_\_
6. \_\_\_\_\_



Knip en plak die korrekte getal  
lettergrepe in die blokke hieronder

1. 

o	n
---	---

d	e	r
---	---	---

w	y	s
---	---	---

e	r
---	---

2. 

--

--

3. 

--

--

--

4. 

--

--

--

5. 

--

--

--

1. 

o	n	d	e	r	w	y	s	e	r
---	---	---	---	---	---	---	---	---	---

2. 

k	l	a	s	m	a	a	t
---	---	---	---	---	---	---	---

3. 

m	i	d	d	a	g
---	---	---	---	---	---

4. 

v	e	r	s	t	a	a	n
---	---	---	---	---	---	---	---

5. 

a	l	f	a	b	e	t
---	---	---	---	---	---	---



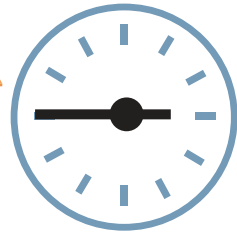
1.5 metres





# Rymwoorde

Pas die woorde wat rym by mekaar deur hul met 'n lyn te verbind.

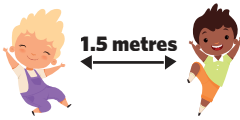


lank
raket
blond
geelslang
verspeel
papier
woord

moord
bank
bang
versier
pakket
gesteel
grond

Week 2

Gradd 3



Lees die getalle hardop.

1	2	3	4	5	6	7	8	9	10
11	12	13	14	15	16	17	18	19	20
21	22	23	24	25	26	27	28	29	30
31	32	33	34	35	36	37	38	39	40
41	42	43	44	45	46	47	48	49	50
51	52	53	54	55	56	57	58	59	60
61	62	63	64	65	66	67	68	69	70
71	72	73	74	75	76	77	78	79	80
81	82	83	84	85	86	87	88	89	90
91	92	93	94	95	96	97	98	99	100
101	102	103	104	105	106	107	108	109	110
111	112	113	114	115	116	117	118	119	120
121	122	123	124	125	126	127	128	129	130
131	132	133	134	135	136	137	138	139	140
141	142	143	144	145	146	147	148	149	150
151	152	153	154	155	156	157	158	159	160
161	162	163	164	165	166	167	168	169	170
171	172	173	174	175	176	177	178	179	180
181	182	183	184	185	186	187	188	189	190
191	192	193	194	195	196	197	198	199	200





Gebruik die getalkaart op bladsy 24 om die volgende vrae te beantwoord.

1. Kleur al die veelvoude van 3 in groen.
2. Watter getal kom na 183? Omkring dit.
3. Watter getal kom voor 58? Trek 'n kruis.
4. Watter getal kom tussen 132 en 134? Kleur dit met blou in.
5. \_\_\_\_\_ is voor 125.
6. \_\_\_\_\_ is na 100.
7. 111 is tussen \_\_\_\_\_ en \_\_\_\_\_.



1.5 metres



1. Voltooi die getallelyn.

- a. 178, \_\_\_\_\_, \_\_\_\_\_, 181, \_\_\_\_\_, \_\_\_\_\_, \_\_\_\_\_, \_\_\_\_\_
- b. 200, \_\_\_\_\_, \_\_\_\_\_, 197, \_\_\_\_\_, \_\_\_\_\_, 194, \_\_\_\_\_
- c. 156, 158, \_\_\_\_\_, \_\_\_\_\_, 166, \_\_\_\_\_, \_\_\_\_\_, \_\_\_\_\_
- d. 192, \_\_\_\_\_, \_\_\_\_\_, 186, \_\_\_\_\_, \_\_\_\_\_, \_\_\_\_\_, \_\_\_\_\_

2. Voltooi die tabel deur by te voeg of af te trek.

Week 2  
Graad 3

+5

100	105								
-----	-----	--	--	--	--	--	--	--	--

-5

315	310								
-----	-----	--	--	--	--	--	--	--	--

+10

540									
-----	--	--	--	--	--	--	--	--	--

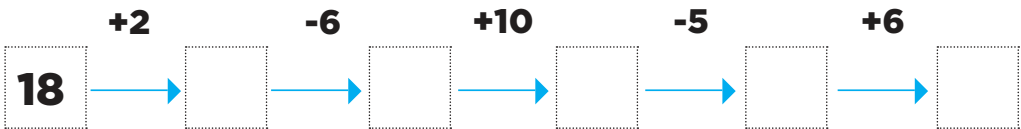
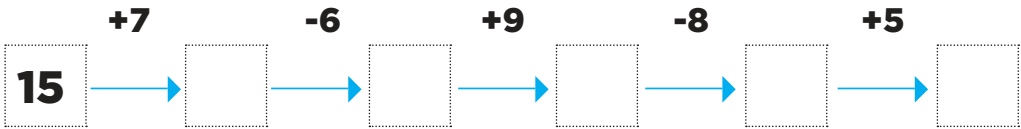
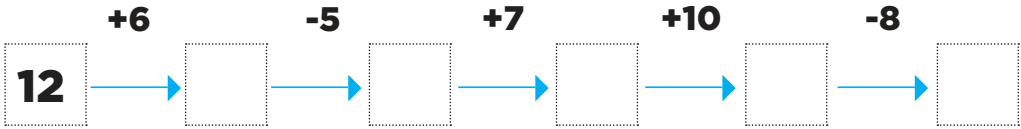
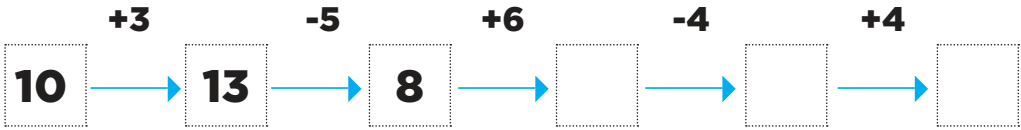
-10

1 000									
-------	--	--	--	--	--	--	--	--	--



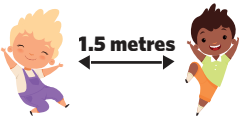
5

Volg die figuur en skryf die regte getalle in die leë blokke neer.



Week 2

Gradd 3



Verdeling van getalle  
Ontbind die volgende somme  
deur die getalle te verdeel

5

$$\begin{array}{r} \text{Eg. } 43 + 26 = 40 + 3 + 20 + 6 \\ \quad \quad \quad \underline{60 + 9} \\ \quad \quad \quad 69 \end{array}$$

1.  $62 + 23 =$

---

2.  $12 + 77 =$

---

3.  $32 + 43 =$

---

4.  $54 + 22 =$

---

5.  $41 + 56 =$

---

Week 2

Graad 3



# Woordsomme

## Voltooi die woordsomme

1. Tacky het 9 vriende. 2 vriende is weggevoer. Hoeveel bly oor?

\_\_\_\_\_  \_\_\_\_\_ = \_\_\_\_\_

2. 12 pikkewyne soek kos in die see. 4 pikkewyne vertrek en gaan na die wal. Hoeveel pikkewyne bly oor in die see?


\_\_\_\_\_  \_\_\_\_\_ = \_\_\_\_\_

3. Tacky het 6 visse. Perry het 2 visse. Hoeveel minder visse het Perry as Tacky.

\_\_\_\_\_  \_\_\_\_\_ = \_\_\_\_\_

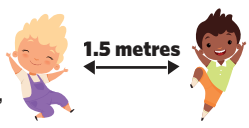
4. 17 pikkewyne was bo-op die berg. 5 pikkewyne het van die berg afgeklim. Hoeveel pikkewyne is bo op die berg?

\_\_\_\_\_  \_\_\_\_\_ = \_\_\_\_\_



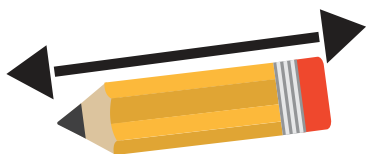
Week 2

Graad 3




# Meting

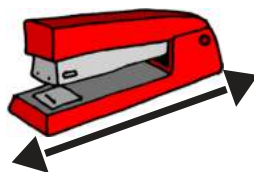
Gebruik 'n liniaal om die klasvoorwerpe te meet.



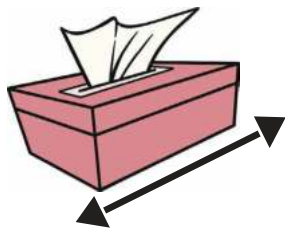
\_\_\_\_\_ cm.




\_\_\_\_\_ cm.



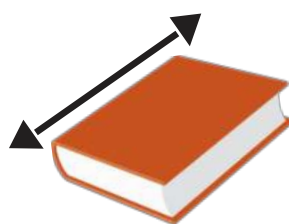
\_\_\_\_\_ cm.



\_\_\_\_\_ cm.



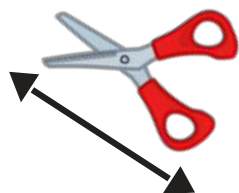
\_\_\_\_\_ cm.



\_\_\_\_\_ cm.

Week 2


Graad 3



\_\_\_\_\_ cm.



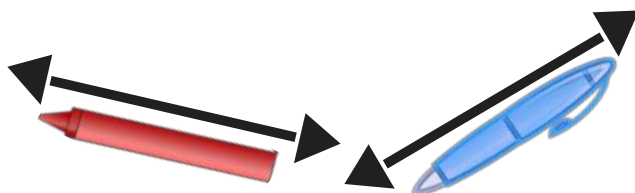
\_\_\_\_\_ cm.



\_\_\_\_\_ cm.



\_\_\_\_\_ cm.



\_\_\_\_\_ cm.

\_\_\_\_\_ cm.



# Success begins with education

Parents will be able to visit the website and watch daily videos or they can subscribe to our Zoshy Telegram channel to receive daily videos. One can also download the PDF version of the book on the website. Also watch our daily show on Active Kids to watch your favourite lessons.



<https://t.me/zoshyonline>



**For extra perks!**

**How does it work?**

## Register at zoshy

You can save your favourite lessons and find them easier

## Easy peasy steps to follow

- Step 1: Find us at [www.zoshy.online](http://www.zoshy.online) or scan the QR code
- Step 2: Find your grade and select the year
- Step 3: Choose your language
- Step 4: Choose the week you want to learn out of
- Step 5: Choose lessons from what lessons there are
- Step 6: Download booklet if you do not have it
- Step 7: Watch and follow the teacher as she explains what to do in the book
- Step 8: Follow us on Facebook (Zoshy & Active Kids ) to never miss a video
- Step 9: Subscribe to our Zoshy Telegram channel if you want to receive daily updates



[www.zoshy.online](http://www.zoshy.online)

In collaboration with the Ministry of Education, Arts and Culture

**PRINT**

- 1** Turn the booklet to landscape.
- 2** Take a ruler & tear the booklet at the top long fold.
- 3** Fold the booklet in half.
- 4** The learning journey can start.

**STEPS**  
HOW TO TEAR & USE  
THE BOOKLET



# DEAR SCHOOL REPRESENTATIVE



## LANGUAGE INFORMATION SHEET



Namibia Media Holdings is committed to translate and distribute all Educational booklets for Pre-primary to Grade 3 in various languages. These languages will be printed and distributed in the coming weeks. To assist us, please complete the form below with information regarding your school, region, circuit, languages taught in each grade as well as the number of children per language. This will assist us in accurately distributing all languages across the country.

**School:** \_\_\_\_\_

**School contact number:** \_\_\_\_\_

**School address:** \_\_\_\_\_

**Region:** \_\_\_\_\_

**Circuit:** \_\_\_\_\_



Language	Amount of children per Grade for each language / Requested copies			
	Pre-primary	Grade 1	Grade 2	Grade 3
English				
Afrikaans				
German				
Khoekhoegawab				
Otjiherero				
Oshikwanyama				
Oshindonga				
Rukwangali				
Silozi				
Thimbukushu				
Other: .....				

**Circuit officer, please provide your contact details below:**

**Name:** \_\_\_\_\_

**Contact number:** \_\_\_\_\_

**Address:** \_\_\_\_\_



**Signature**.....